

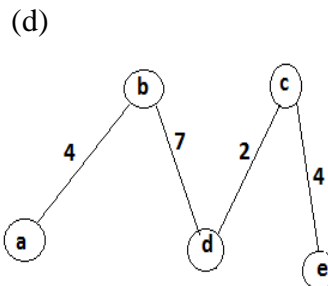
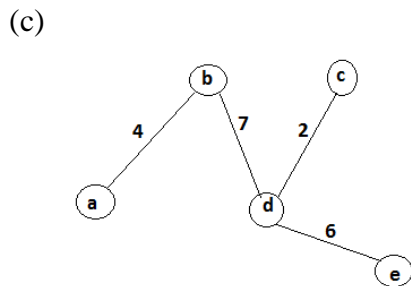
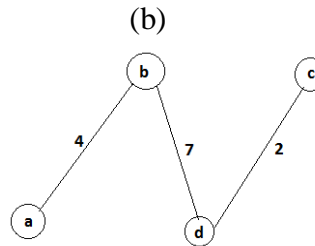
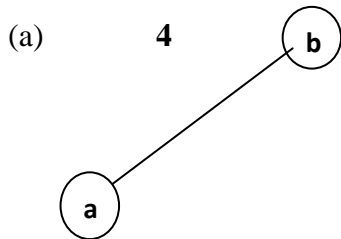
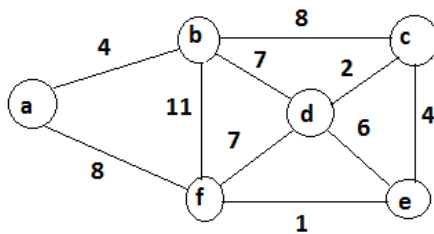
## Information Technology

## Sample Paper-1

Q.1- Let  $T(n)$  be defined by  $T(1) = 11$  and  $T(n+1) = 3n + T(n)$  for all integers  $n \geq 1$ . Which of the following represents the order of growth of  $T(n)$  as function of  $n$ ?

- (a)  $O(n)$                       (b)  $O(n \log n)$                       (c)  $O(n^2)$                       (d)  $O(n^2 \log n)$

Q.2- Which of the following trees are not formed as an intermediate MST (starting with vertex a when applying Prim's algorithm)?



Q.3- The keys 1, 5, 28, 19, 15, 20, 33, 12, 17, 10 are inserted into a hash table in which collision is resolved by chaining. If the hash function  $h(k) = k$  What is the length of Longest chain:

- (a) 1                      (b) 2                      (c) 3                      (d) 4

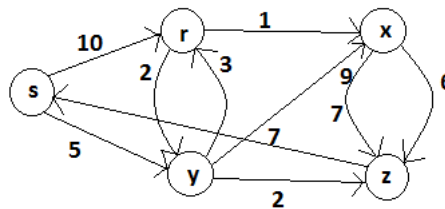
Q.4- Which of the following is not WP complete?

- (a) Determining whether a Boolean proposition is satisfiable.
- (b) Determining the clique of maximum size within graph.
- (c) Determining whether a directed graph contains a Hamiltonian circuit.
- (d) Determining whether an undirected graph contains an Eulerian circuit.

Q.5- Which of the set of shortest path estimates node is not obtained as an intermediate on applying Dijkstra's algo. On the following graph.

(S: source vertex).

	s	r	x	y	z
(a)	0	$\infty$	$\infty$	5	7
(b)	0	10	$\infty$	5	$\infty$
(c)	0	8	9	5	7
(d)	0	8	+3	5	7



Q.6- If original data 1101011011 and generator 10011 then the stream will be sent as

- (a) 11010110111111
- (b) 1101000111001
- (c) 11010110111110
- (d) 11000110110101

Q.7- In go-back NARQ if next ACK arrives after time out then sender will.

- (a) Sends next frame
- (b) Sends only last frame
- (c) Sends frame after last ACK arrived
- (d) None

Q.8- A go back- N ARQ uses a window size of 15. How many bits are needed to define the sequence number?

- (a) 4
- (b) 5
- (c) 15
- (d) 16



Q.17- A Relation R (A , B , C , D , E) with FD

$AB \rightarrow C$

$C \rightarrow D$

$B \rightarrow E$

(a) Then Relation is in 2<sup>nd</sup> Normal form

(c) Relation is in 4<sup>th</sup> Normal form

(b) Relation is in 3<sup>rd</sup> Normal form

(d) Name of these

Q.18- Consider the following program

```
Main () {  
  Int arr [ ] = {0 , 1 , 2 , 3 , 4};  
  Int *ptr ;  
  For (ptr = arr + 4 ; ptr ≥ arr ; ptr--)  
  Printf (4% dn , arr [ptr-arr]) ;  
} Which of the following is tone?
```

(a) Compiler error (b) Infinite Loop

(c) 0 1 2 3 4 (d) 4 3 2 1 0

Q.19- Consider the following programe

```
Void main () {  
  Inta [3] [4] = {  
                3 , 6 , 9 , 10  
                2 , 3 , 5 , 1  
                5 , 6 , 7 , 18  
                } ;  
  Printf (^a\ n %4 %4n , a+1 , s a+1 ) ;  
}
```

Assume the array begins at address 65472

(a) 65480 , 65496 (b) 65496 , 65480

(c) 654876 (d) 65478 , 65480

Q.20- Void main () {

Char a [ ] = "Brain Tree"

Char \*b = "Brain Tree"

Printf (" %d %d %d %d" , size of (a) , size of (b) , size of (\*a) , size of (\*b)) ;

}

(a) 10 1 1 1

(b) 11 1 1 2

(c) 11 2 1 1

(d) 11 1 2 1

**ENGINEERS CAREER GROUP™**

Head Office: S.C.O-80-81-82,3<sup>rd</sup> and 4<sup>th</sup> floor, Sector-34/A, Chandigarh

TOLL FREE: 1800-270-4242

WEB: [www.engineerscareergroup.in](http://www.engineerscareergroup.in)



Q.21- If  $D_1, D_2$  are two diagonal matrices, then

- (a)  $D_1 D_2 = D_2 D_1$  (b)  $D_1 D_2$  is a Diagonal matrix  
(c) Both of the above (d)  $D_1 D_2$  may or may not be defined

Q.22- If  $A = \begin{bmatrix} 1 & 2 \\ 4 & -3 \end{bmatrix}$ , then  $A^2 + 4A - 5I$  equal to

- (a)  $\begin{bmatrix} 8 & 4 \\ 8 & 0 \end{bmatrix}$  (b)  $\begin{bmatrix} 0 & -4 \\ 8 & 8 \end{bmatrix}$  (c)  $\begin{bmatrix} 2 & 1 \\ 2 & 0 \end{bmatrix}$  (d)  $\begin{bmatrix} 1 & 1 \\ 1 & 0 \end{bmatrix}$

Q.23- If two squares are chosen at random on a chess board the probability that they have a side in common is

- (a)  $1/9$  (b)  $2/7$  (c)  $1/18$  (d) none

Q.24- An I.F. of the differential equation  $(1 - x^2) \frac{dy}{dx} - xy = 1$  is

- (a)  $-x$  (b)  $\frac{x}{1-x^2}$  (c)  $\sqrt{1-x^2}$  (d)  $\frac{1}{2} \log_e(1-x^2)$

Q.25- A garrison of 3000 men has provision for 25 days, when given at the rate of 900g per head. At the end of 11 days, a reinforcement arrives and it was found that now the provision will be last 10 days more, when given at the rate of 840 g per head. The strength of reinforcement is

- (a) 1200 men (b) 1500 men (c) 1600 men (d) 1800 men

Q.26- Out of the given alternatives, choose the one which can be substituted for the given words or sentences.

Too much official formality

- (a) delayed (b) officiousness (c) formality (d) red tapism

Q.27- The following questions comprise two words each that have a certain relationship between them, followed by four lettered pairs of words. Select the lettered pair that has the relationship as the original pair of words.

i) shrub : prune

- (a) beard : shave (b) hair : trim  
(c) lawn : mow (d) wool : shear

---

**ENGINEERS CAREER GROUP™**

Head Office: S.C.O-80-81-82, 3<sup>rd</sup> and 4<sup>th</sup> floor, Sector-34/A, Chandigarh

TOLL FREE: 1800-270-4242

WEB: [www.engineerscareergroup.in](http://www.engineerscareergroup.in)



Q.28- A group of labourers promise to do a piece of work in 12 days, but 5 of them do not turn up. If the rest of the group do the work in 18 days, find the original number of men.

- (a) 15            (b) 25            (c) 35            (d) 45

Q.29- Hari (H), Gita(G), Irfan(I) and Saira(S) are siblings(i.e., brothers and sisters). All were born on 1st January. The age difference between any two successive siblings (that is born one after another) is less than 3 year. Given the following facts:

I. Hari's age + Gita's age > Irfan's age + Saira's age

II. The age difference between Gita and Saira is 1 year. However, Gita is not the oldest and Saira is not the youngest.

III. There are no twins.

In what order were they born (oldest first)?

- (a) HSI G            (b) SGHI            (c) IGSH            (d) IHSG

Q.30- Given digits 2,2,3,3,3,4,4,4,4 how many distinct 4 digit numbers greater than 3000 can be formed?

- (a) 50            (b) 51            (c) 52            (d) 54

